




# 3 The time

**1** Where are you usually at these times?

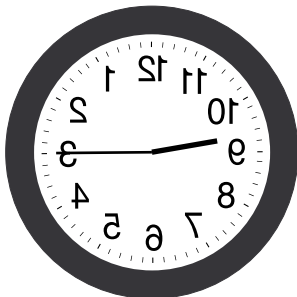
- 05.00 .....
- 08.00 .....
- 13.00 .....
- 16.00 .....
- 22.00 .....

**2** These clocks are reflected in a mirror.

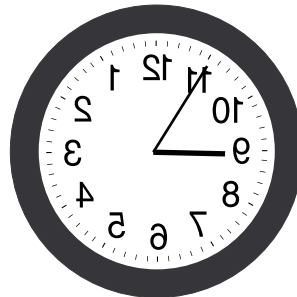
Underline what time it really is.




a) ten thirty / eleven thirty




b) a quarter to nine /  
a quarter past nine




c) five to nine / five past nine




d) twelve o'clock / six o'clock



e) ten to four / ten past five



f) twenty five past four /  
twenty five past five



g) a quarter to three /  
a quarter to two

**3** Work in groups. Solve the brainteaser.

It takes a grandfather clock 30 seconds to strike 6 o'clock.  
How long will it take to strike 12 o'clock?  
(The answer is NOT 60 seconds!)